

Introduction to Digital Computers

Talk #2

Dr. Guy Even

March 14, 2002

0-0

Today's agenda

- The digital abstraction: noise models
- The zero noise model
 - Digital interpretation of analog signals
 - Definition of gates
- Bounded-noise model
 - Digital interpretation of analog signals
 - Definition of gates
- Combinational circuits
 - Gates as implementations of Boolean functions
 - Building blocks: gates and wires
 - Nets
 - Syntactic definition

1

Noise models

A wire connecting points A and B:



zero-noise model: $\forall t : B(t) = A(t)$

Noise signal: models noise that wire accumulates

$$n_B(t) \triangleq B(t) - A(t)$$

bounded-noise model: $\forall t : |n_B(t)| \leq \epsilon$

uniform bounded-noise model: same bound ϵ applies to all the noise signals in the circuit.

2

zero-noise model

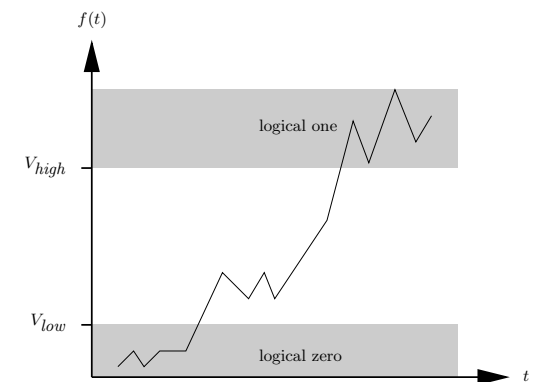
Interpretation of analog signals as digital signals

Two voltage thresholds are defined: $V_{low} < V_{high}$.

Consider an analog signal $f(t)$. The digital signal $dig(f(t))$ is defined as follows.

$$dig(f(t)) \triangleq \begin{cases} 0 & \text{if } f(t) < V_{low} \\ 1 & \text{if } f(t) > V_{high} \\ \text{non-logical} & \text{otherwise.} \end{cases}$$

3



4

zero-noise model: def. of inverter

Definition 1 (inverter in zero-noise model) A gate G with a single input x and a single output y is an *inverter* if its static transfer function $f(z)$ satisfies the following the following two conditions:

1. If $z < V_{low}$, then $f(z) > V_{high}$.
2. If $z > V_{high}$, then $f(z) < V_{low}$.

Equivalently:

1. If $\text{dig}(z) = 0$, then $\text{dig}(f(z)) = 1$.
2. If $\text{dig}(z) = 1$, then $\text{dig}(f(z)) = 0$.

5

Questions:

- Define a NAND-gate in the zero-noise model.
- Define a gate that implements a Boolean function $f : \{0, 1\}^2 \rightarrow \{0, 1\}$ in the zero-noise model.

6

bounded-noise model: analog signals \implies digital signals

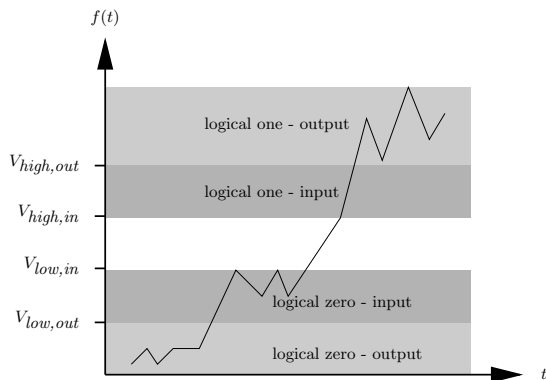
Four voltage thresholds are defined:

$$V_{low,out} < V_{low,in} < V_{high,in} < V_{high,out}$$

Noise-margin:

$$\min\{V_{low,in} - V_{low,out}, V_{high,out} - V_{high,in}\}$$

7



8

bounded-noise model: analog signals \implies digital signals

Consider an *input signal* $f_{in}(t)$. The digital signal $\text{dig}(f_{in}(t))$ is defined as follows.

$$\text{dig}(f_{in}(t)) \triangleq \begin{cases} 0 & \text{if } f_{in}(t) < V_{low,in} \\ 1 & \text{if } f_{in}(t) > V_{high,in} \\ \text{non-logical} & \text{otherwise.} \end{cases} \quad (1)$$

9

bounded-noise model: analog signals \implies digital signals

Consider an *output signal* $f_{out}(t)$. The digital signal $\text{dig}(f_{out}(t))$ is defined analogously.

$$\text{dig}(f_{out}(t)) \triangleq \begin{cases} 0 & \text{if } f_{out}(t) < V_{low,out} \\ 1 & \text{if } f_{out}(t) > V_{high,out} \\ \text{non-logical} & \text{otherwise.} \end{cases} \quad (2)$$

10

bounded-noise model: def. of inverter

Definition 2 (inverter in the bounded-noise model) A gate G with a single input x and a single output y is an *inverter* if its static transfer function $f(z)$ satisfies the following two conditions:

1. If $z < V_{\text{low,in}}$, then $f(z) > V_{\text{high,out}}$.
2. If $z > V_{\text{high,in}}$, then $f(z) < V_{\text{low,out}}$.

11

Questions:

- Define a NAND-gate in the bounded-noise model.
- Define a gate that implements a Boolean function $f : \{0, 1\}^2 \rightarrow \{0, 1\}$ in the bounded-noise model.

12

Stable signals

- An analog signal $f(t)$ is *logical* at time t if $\text{dig}(f(t)) \in \{0, 1\}$.
- An analog signal $f(t)$ is *stable* during the interval $[t_1, t_2]$ if $f(t)$ is logical for every $t \in [t_1, t_2]$.
- Continuity of $f(t)$ and $V_{\text{low}} < V_{\text{high}} \implies$

Claim 1 If an analog signal $f(t)$ is stable during the interval $[t_1, t_2]$ then one of the following holds:

1. $\text{dig}(f(t)) = 0$, for every $t \in [t_1, t_2]$, or
2. $\text{dig}(f(t)) = 1$, for every $t \in [t_1, t_2]$.

13

Combinational circuits

Our goal is to prove two theorems:

- (a) Every Boolean function can be implemented by a combinational circuit (very easy).
- (b) Every combinational circuit implements a Boolean function.

Bonuses:

- Simulate a combinational circuit in linear time.
- Compute the propagation delay of a combinational circuit in linear time.

14

Boolean functions

Let $\{0, 1\}^n$ denote the set of n -bit strings.

A Boolean function is defined as follows.

Definition 3 A function $f : \{0, 1\}^n \rightarrow \{0, 1\}^k$ is called a *Boolean function*.

15

Consistent state of gates

Terminology: inputs and outputs of a gate are called *terminals*, *ports*, or even *pins*.

Simplification: consider a gate G with 2 inputs, denoted by x_1, x_2 , and a single output, denoted by y . We denote the digital signal at terminal x_1 by $x_1(t)$.

Definition 4 A gate G is *consistent with a Boolean function f at time t* if the input values are digital at time t , and

$$y(t) = f(x_1(t), x_2(t)).$$

16

Gates as implementations of Boolean functions

The **propagation delay** of a gate G is the amount of time that elapses till G becomes consistent.

Definition 5 A gate G implements a Boolean function $f : \{0, 1\}^2 \rightarrow \{0, 1\}$ with propagation delay t_{pd} if the following holds.

For every $\sigma_1, \sigma_2 \in \{0, 1\}$, if $x_i(t) = \sigma_i$, for $i = 1, 2$, during the interval $[t_1, t_2]$, then

$$y(t) = f(\sigma_1, \sigma_2),$$

for every $t \in [t_1 + t_{pd}, t_2]$.

17

Remarks on implementation of a Boolean function by a gate

Compact form: A gate G implements a Boolean function $f : \{0, 1\}^n \rightarrow \{0, 1\}$ with propagation delay t_{pd} if

stability of the inputs of G in the interval $[t_1, t_2]$

\implies

the gate G is consistent with f in the interval $[t_1 + t_{pd}, t_2]$.

18

Remarks on implementation of a Boolean function by a gate

What if $t_2 - t_1 < t_{pd}$? Then gate does not have enough time to become consistent. Interval $[t_1 + t_{pd}, t_2]$ in definition is empty...

19

Remarks on implementation of a Boolean function by a gate

Contamination delay: Consider a gate G that is consistent with a Boolean function f . The **contamination delay** the amount of time that the outputs of G retain their values after the inputs of G become non-digital.

“Pessimistic” assumption: contamination delay is zero. (i.e. gates can notice instantly that an input becomes non-digital.)

20

Remarks on implementation of a Boolean function by a gate

t_{pd} is an **upper bound** on the time it takes to obtain consistency.

(If we buy a 2GHz microprocessor and operate it with a 1GHz clock, it should work. What about the converse?)

21

Building blocks of combinational circuits

- gates
- nets (generalization of wires)

22

Gates

Fan-in: the number of inputs of a gate.

We will restrict the fan-in of basic gates to at most 2 – 3 input ports.

The basic gates that we consider are: inverter (NOT-gate), OR-gate, NOR-gate, AND-gate, NAND-gate, XOR-gate, NXOR-gate, multiplexer (MUX).

23

Wires & Nets

Wires connect points to each other. Very often we need to connect several terminals (i.e. inputs and outputs of gates) together.

Ignore how connections are actually made.

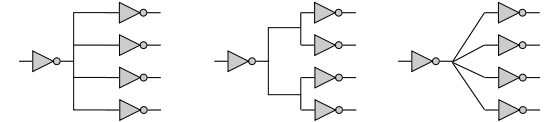
A **net** is a subset terminals that are connected by wires. In the digital abstraction we assume that the signals all over a net are identical (why?).

The **fan-out** of a net N is the number of terminals that are connected by N .

24

Drawing nets

Three different drawings of the same net. We may draw a net in any way that we find convenient or aesthetic. The interpretation of the drawing is that terminals that are connected by lines or curves constitute a net.



25

Digital signals for nets

We would like to define the digital signal $N(t)$ for a whole net N .

Noise creates different analog signals along the net.

Define $N(t)$ to logical only if there is a **consensus** among all the digital interpretations of analog signals at different terminals of the net.

In other words:

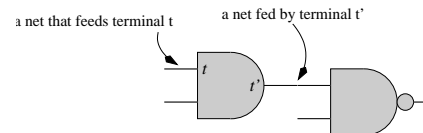
- $N(t)$ is zero if the digital values of all the analog signals along the net are zero.
- $N(t)$ is one if the digital values of all the analog signals along the net are one.
- If there is no consensus, then $N(t)$ is non-logical.

26

Directions in nets

A net N **feeds** an input terminal t if the input terminal t in N .

A net N is **fed** by an output terminal t if t is in N .



Information is “supplied” by output terminals and is “consumed” by input terminals. From an electronic point of view, output terminals are connected via resistors either the the ground or the the power. Input terminals are connected only to capacitors.

27

Simple nets

Definition 6 A net N is **simple** if (a) N is fed by exactly one output terminal, and (b) N feeds at least one input terminal.

A simple net $N = \{t, t_1, t_2, \dots, t_k\}$, where t is an output terminal, and $\{t_i\}_{i=1}^k$ are input terminals can be modeled by wires $\{w_i\}_{i \in I}$. Each wire w_i connects t and t_i . We may regard each wire w_i as a directed edge $t \rightarrow t_i$.

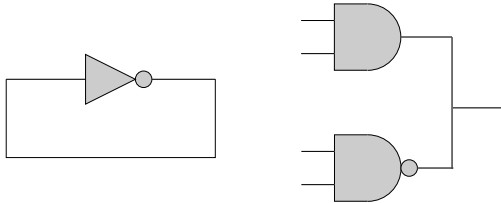
Directed graph model of a circuit. If all the nets are simple, then circuit may be modeled by a **directed graph**.

- vertices = gates
- directed edges = wires

If all the nets in C are simple, then we denote the directed graph that models a circuit C by $DG(C)$.

28

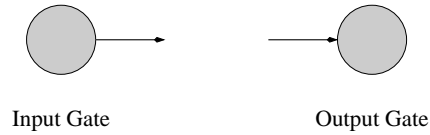
Are these combinational circuits?



29

Input gates & output gates

Input and output gates model communication with the “external world”.



30

Syntactic definition of combination circuits

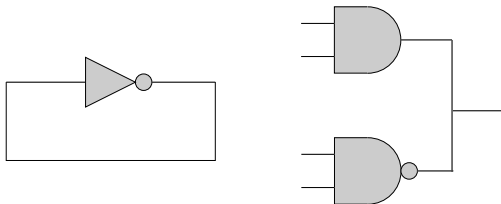
Definition 7 A *combinational circuit* is a pair $C = \langle \mathcal{G}, \mathcal{N} \rangle$ that satisfies the following conditions:

1. \mathcal{G} is a set of gates.
2. \mathcal{N} is a set nets over terminals of gates in \mathcal{G} .
3. Every terminal t of a gate $G \in \mathcal{G}$ belongs to exactly one net $N \in \mathcal{N}$.
4. Every net $N \in \mathcal{N}$ is simple.
5. The directed graph $DG(C)$ is acyclic.

31

Back to the bad circuits

Which conditions are violated by these circuits?



32

Combinational circuits: Syntax \Rightarrow Semantics

Completeness: for every Boolean function f , there exists a combinational circuit that implements f .

Soundness: every combinational circuit implements a Boolean function. (NP-Complete to compute the Boolean function that is implemented by a given combinational circuit.)

Simulation: given the digital values of the inputs of a combinational circuit, one can simulate the circuit in linear time.

Delay analysis: given the propagation delays of all the gates in a combinational circuit, one can compute in linear time the propagation delay of the circuit.

33

Simulation theorem of combinational circuits

Theorem 2 Let $C = \langle \mathcal{G}, \mathcal{N} \rangle$ denote a combinational circuit that contains k input gates. Let $\{x_i\}_{i=1}^k$ denote the output terminals of the input gates in C . Assume that the digital signals $\{x_i(t)\}_{i=1}^k$ are stable during the interval $[t_1, t_2]$. Then, for every net $N \in \mathcal{N}$ there exist:

1. a Boolean function $f_N : \{0, 1\}^k \rightarrow \{0, 1\}$, and
2. a propagation delay $t_{pd}(N)$

such that

$$N(t) = f_N(x_1(t), x_2(t), \dots, x_k(t)),$$

for every $t \in [t_1 + t_{pd}(N), t_2]$.

34